



数と数字

あうのは どれ

おうちの方へ 具体物(ここでは野菜)と、半具体物(●)、数の言葉(数詞)、数字を対応させるおけいこです。線でつなぐ前に、それぞれの数を確認させてください。

		なまえ
がつ	にち	

かずと ことばと すうじが あう ように、  
せんで つなぎましょう。

	●		●	に	●	
	●		●	いち	●	
	●		●	さん	●	
	●		●	し (よん)	●	
	●		●	ご	●	





数と数字

あうのは どれ



		なまえ
がつ	にち	

かずと ことばと すうじが あう ように、  
せんで つなぎましょう。





はち

10





じゅう

8




く  
(きゅう)

6



ろく

7



しち  
(なな)

9



数と数字

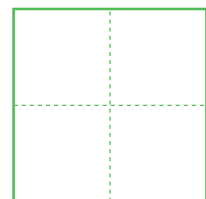
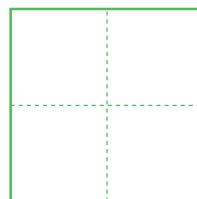
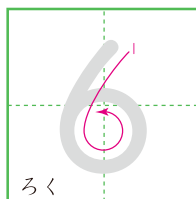

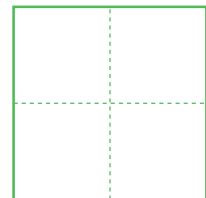
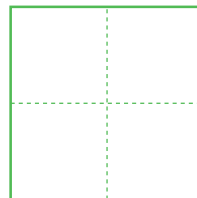
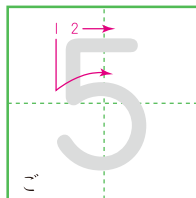
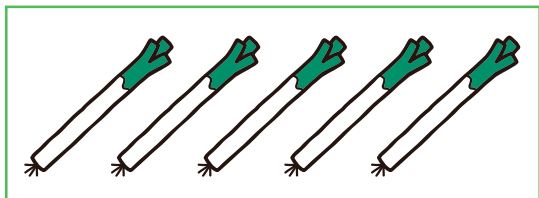

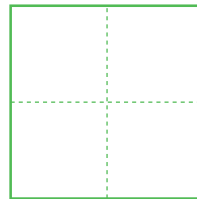
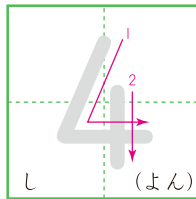
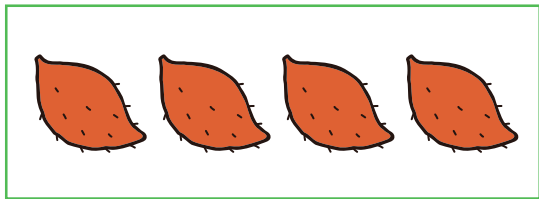
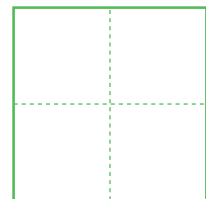
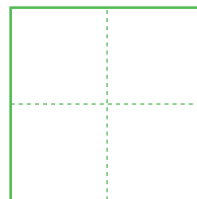
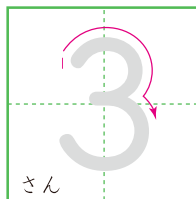
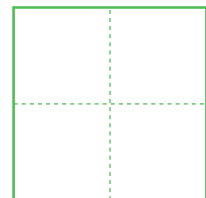
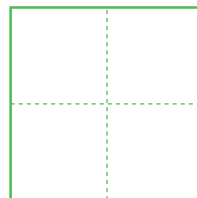
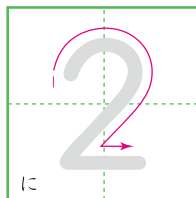

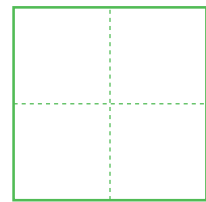

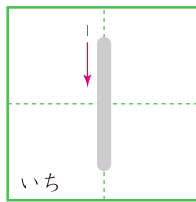

## すうじを かこう

おうちの方へ 数字の形や書き順に注意して書くように  
ご指導ください。

		なまえ
がつ	にち	

うすい すうじを なぞりましょう。

に すうじを かきましょう。





数と数字

すうじを かこう

		なまえ
がつ	にち	

うすい すうじを なぞりましょう。

に すうじを かきましょう。

